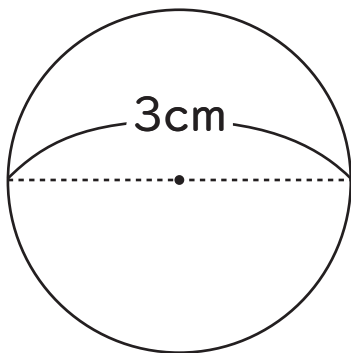


● 次の円の円周の長さを求めましょう。

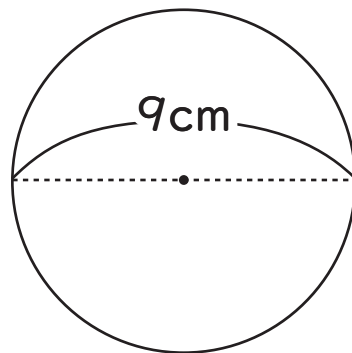
1



$$3 \times 3.14 = 9.42$$

( 9.42cm )

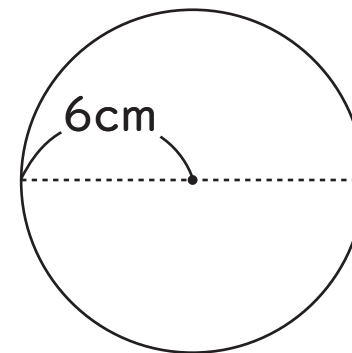
2



$$9 \times 3.14 = 28.26$$

( 28.26cm )

3



$$6 \times 2 \times 3.14 = 37.68$$

( 37.68cm )

4 直径 12cm の円

$$12 \times 3.14 = 37.68$$

( 37.68cm )

5 半径 3cm の円

$$3 \times 2 \times 3.14 = 18.84$$

( 18.84cm )

6 半径 8cm の円

$$8 \times 2 \times 3.14 = 50.24$$

( 50.24cm )